

# Summer Themed Maths Activity Booklet


Name: \_\_\_\_\_



# Addition and Subtraction to 20

## Colour by Number

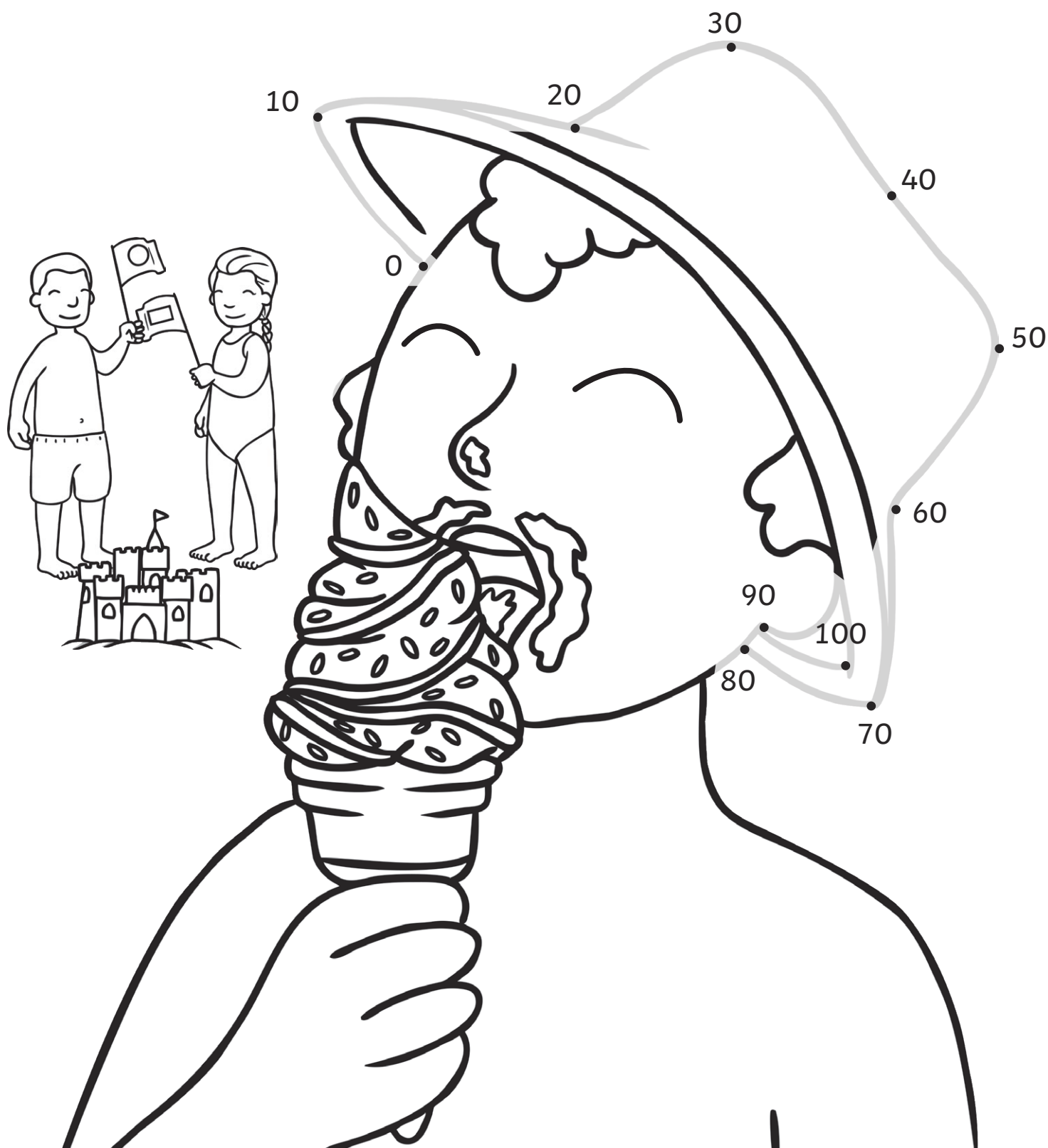
Solve the calculations to colour in this summer picture.



<b>Answer:</b>	<b>16</b>	<b>15</b>	<b>20</b>	<b>12</b>	<b>13</b>
<b>Colour:</b>	red	yellow	green	brown	blue

# Counting in 10s Dot to Dot

Join the dots to reveal the picture!



# Addition and Subtraction to 20

## Summer Mosaic

Solve the calculations to reveal the hidden picture. Each answer has a special colour.

yellow = 0-8

pink = 9-15

brown = 16-20

						$17 - 1$	
			$19 - 4$	$9 + 6$		$17 + 2$	
		$10 - 1$	$6 + 5$	$19 - 10$	$12 + 2$	$18 - 2$	
	$15 - 4$	$12 + 3$	$18 - 9$	$11 + 2$	$17 - 2$	$5 + 8$	
	$20 - 20$	$5 + 2$	$17 - 9$	$2 + 6$	$2 - 1$	$2 + 2$	
	$9 - 1$	$8 + 0$	$10 - 2$	$1 + 6$	$18 - 10$	$4 + 3$	
		$14 - 7$	$6 - 3$	$3 + 2$	$5 + 2$		
			$7 - 4$	$20 - 12$			
			$5 + 1$	$2 + 6$			









**Challenge:** You have 5 ice creams. You eat 2. How many do you have left?  
Write this problem as a calculation.

# I Spy and Count to 20

Count the summer objects and write the numeral and number words.



# I Spy and Count to 20





Object	Numerals	Number Word	Object	Numerals	Number Word
					
					
					
					



# 2D Shape Hunt



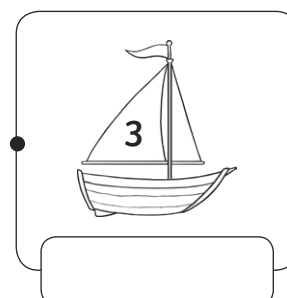


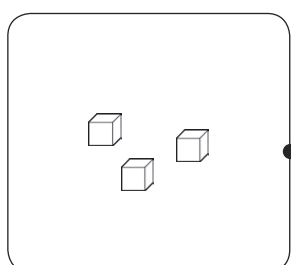
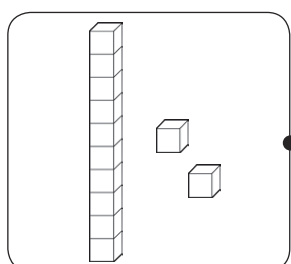
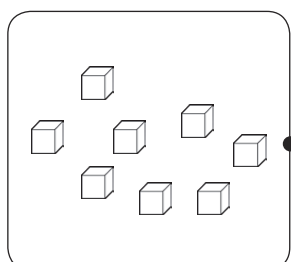
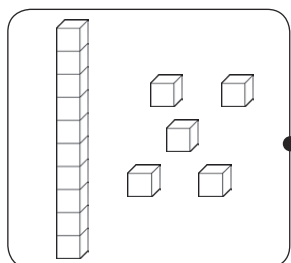
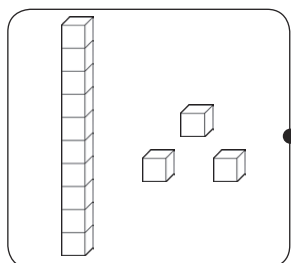
Count and colour the 2D shapes hidden in this summer scene.



# Number Representations to 20 Match Up

Draw a line to match the boats to the correct number representation.  
Write the number in words.

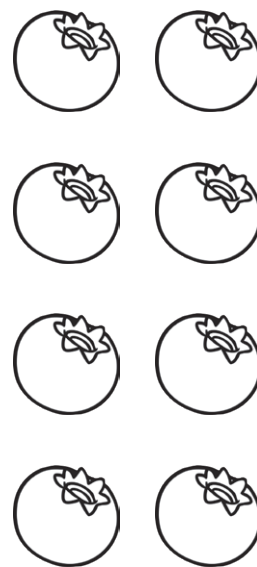






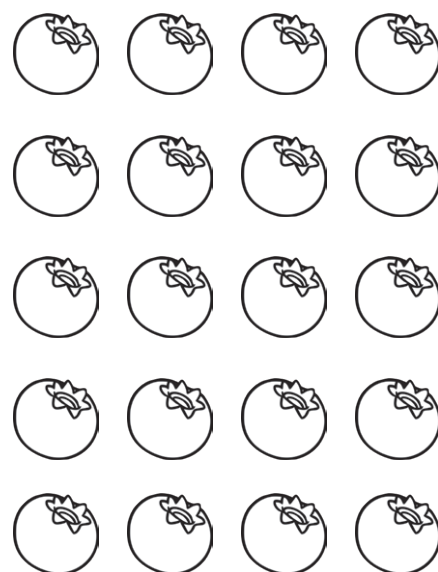


# Summer Fruits Fractions

Colour the correct fractions of the fruits.

For each group of summer fruits, colour in  $\frac{1}{2}$ .



For each group of summer fruits, colour in  $\frac{1}{4}$ .



# Summer Holiday Activities

## Board Game

### You will need:



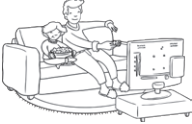
























- Counters
- A dice
- Pencil

### Instructions

- Each player starts the game with 20 points.
- Take turns to throw the dice and move your counter around the board.
- When you land on a square, add or subtract the points on that square to or from your score.
- When a player reaches the finish, the player with the most points is the winner.


Keep track of your score here:

Name:	Name:	Name:	Name:
20	20	20	20


<b>START</b>	 $+ 10$	 $- 5$			
	 $+ 2$	 $- 1$	 $+ 5$	 $- 2$	
<b>FINISH</b>					 $+ 10$
 $+ 10$	 $- 1$	 $+ 2$	 $- 5$		 $- 3$
		 $+ 10$		 $+ 4$	
 $- 3$	 $+ 4$	 $- 1$	 $+ 6$		 $- 1$
 $+ 10$					 $+ 6$
 $- 2$	 $+ 5$	 $- 1$	 $+ 2$	 $- 5$	 $+ 10$

# Telling the Time


It's time to go on holiday. Use the clocks to help plan the trip.




What time do you get up to go on holiday? \_\_\_\_\_




What time do you set off on holiday? \_\_\_\_\_




What time do you play on the beach? \_\_\_\_\_



What time do you eat an ice cream? \_\_\_\_\_



At 4 o'clock, you go swimming.  
Draw the hands on the clock.



At half past 6, you go to a disco.  
Draw the hands on the clock.


















If you go on holiday the day after Sunday, what day will you go on holiday? \_\_\_\_\_

If you go to the beach on the second day of your holiday, what day will you go to the beach? \_\_\_\_\_

# Counting in 2s Maze


Help the frog find the path through the maze to the lily pad counting on in 2s from zero.



	0	2	4	6	8	2	8
	10		8		10		12
	2	14	16	14	12	46	4
	12		18		16		34
10	8	4	44	20	22	24	32
2		22		30		26	
6	4	36	34	32	30	28	14
20		38		28		8	
2	26	40	32	30	28	2	
24		42		46		54	
2	6	44	46	48	50	52	

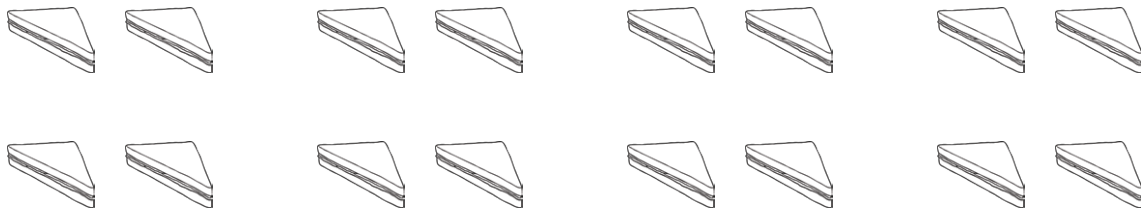
# Picnic Time Multiplication

1. 5 children are on a picnic. Each child eats 2 apples. How many apples are eaten?




Answer:

2. 8 children are on a picnic. Each child eats 2 sandwiches. How many sandwiches are eaten?



Answer:

3. 3 children are on a picnic. Each child eats 5 biscuits. How many biscuits are eaten?



Answer: